

### 5Ws

What is the process of transferring pollen between parts of a flower called?

---

Where does the stem transport water to?

---

When seeds start to grow, they... the answer begins with 'g' ?

---


Why are seeds dispersed from plants?

---

Who devised a system for classifying living things including plants?

---

### Speedy Pencils

Write down as much as you can remember about what a plant needs to grow in 5 minutes. 

---

---

---

---

---

### Key word unscramble

1. s l e v a e

Hint: This part makes food for the plant using sunlight and carbon dioxide.

2. t p e l a

Hint: The part of a flower that attracts insects to pollinate the plant.

3. t u n r e i t n s

Hint: The substances that a plant needs to grow (begins with 'n')

4. o l i p l a n t o r

Hint: The name of an insect or animal that transports pollen between plants?

5. L e p s a

Hint: Structures that protect the flower and petals before they open out.

6. r e t f i l i a s i t o n

Hint: The process of male and female parts of a plant making seeds for new plants.

### Quiz

**Which of these is a female plant part?**

a) Style b) filament c) anther

**Which of these parts anchors the plant into the ground?**

a) Leaves b) petals c) roots

**Which plant part absorbs water from the soil?**

a) Roots b) leaves c) stem

**Which female part of the plant contains the ovules?**

a) Style b) stigma c) ovary

**What is the job of the anther?**

a) Absorb water b) make pollen c) protect the petals

### 3, 2, 1

**Name 3 ways seeds can be dispersed:**

---

---

---

**List 2 stages in the life cycle of a flowering plant:**

---


---

**Recall 1 male part of a flower:**


---

### High Five

Write the names of 5 animals that pollinate plants on the hand below:



<https://plentythink.co.uk>  
@plenty\_think



**Y3 Plants Retrieval Mat**